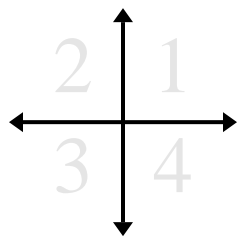




Determine which quadrant each pair of coordinates will be in.



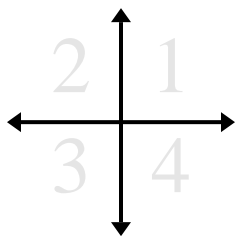
Answers

- Ex)** (12 , -20) (12 , 20) (-12 , 20) (-12 , -20)
- 1)** (-18 , 17) (18 , 17) (18 , -17) (-18 , -17)
- 2)** (3 , 1) (-3 , -1) (-3 , 1) (3 , -1)
- 3)** (-17 , -2) (17 , -2) (-17 , 2) (17 , 2)
- 4)** (7 , -8) (-7 , 8) (-7 , -8) (7 , 8)
- 5)** (16 , -13) (16 , 13) (-16 , 13) (-16 , -13)
- 6)** (-5 , -5) (5 , -5) (-5 , 5) (5 , 5)
- 7)** (-14 , 3) (14 , 3) (14 , -3) (-14 , -3)
- 8)** (5 , 5) (-5 , -5) (-5 , 5) (5 , -5)
- 9)** (-11 , -6) (11 , -6) (-11 , 6) (11 , 6)
- 10)** (9 , -20) (-9 , -20) (-9 , 20) (9 , 20)

- Ex. 4 1 2 3
1. _____
2. _____
3. _____
4. _____
5. _____
6. _____
7. _____
8. _____
9. _____
10. _____



Determine which quadrant each pair of coordinates will be in.



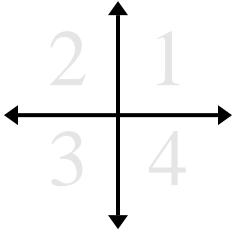
Ex) (12 , -20)	(12 , 20)	(-12 , 20)	(-12 , -20)
1) (-18 , 17)	(18 , 17)	(18 , -17)	(-18 , -17)
2) (3 , 1)	(-3 , -1)	(-3 , 1)	(3 , -1)
3) (-17 , -2)	(17 , -2)	(-17 , 2)	(17 , 2)
4) (7 , -8)	(-7 , 8)	(-7 , -8)	(7 , 8)
5) (16 , -13)	(16 , 13)	(-16 , 13)	(-16 , -13)
6) (-5 , -5)	(5 , -5)	(-5 , 5)	(5 , 5)
7) (-14 , 3)	(14 , 3)	(14 , -3)	(-14 , -3)
8) (5 , 5)	(-5 , -5)	(-5 , 5)	(5 , -5)
9) (-11 , -6)	(11 , -6)	(-11 , 6)	(11 , 6)
10) (9 , -20)	(-9 , -20)	(-9 , 20)	(9 , 20)

Answers

Ex.	<u>4</u>	<u>1</u>	<u>2</u>	<u>3</u>
1.	<u>2</u>	<u>1</u>	<u>4</u>	<u>3</u>
2.	<u>1</u>	<u>3</u>	<u>2</u>	<u>4</u>
3.	<u>3</u>	<u>4</u>	<u>2</u>	<u>1</u>
4.	<u>4</u>	<u>2</u>	<u>3</u>	<u>1</u>
5.	<u>4</u>	<u>1</u>	<u>2</u>	<u>3</u>
6.	<u>3</u>	<u>4</u>	<u>2</u>	<u>1</u>
7.	<u>2</u>	<u>1</u>	<u>4</u>	<u>3</u>
8.	<u>1</u>	<u>3</u>	<u>2</u>	<u>4</u>
9.	<u>3</u>	<u>4</u>	<u>2</u>	<u>1</u>
10.	<u>4</u>	<u>3</u>	<u>2</u>	<u>1</u>



Determine which quadrant each pair of coordinates will be in.



Ex)

1)

2)

3)

4)

5)

6)

7)

8)

9)

10)

Answers

Ex. 4 1 2 3

1. _____

2. _____

3. _____

4. _____

5. _____

6. _____

7. _____

8. _____

9. _____

10. _____